

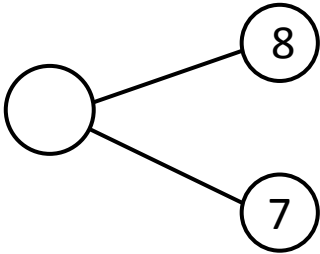


NAME _____

DATE _____

ADDITIONS

Solve the following number bonds. Complete the mathematical sentences to make them equal to the given number bond.

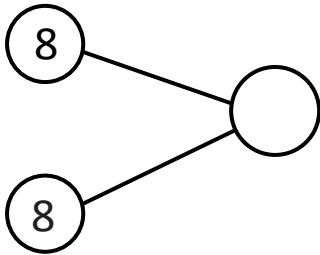


$6 + \underline{\quad} = 15$

$7 + \underline{\quad} = 15$

$8 + \underline{\quad} = 15$

$9 + \underline{\quad} = 15$

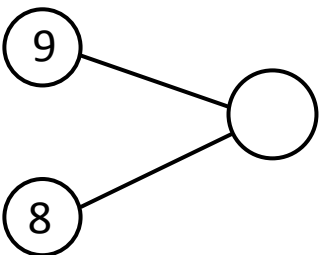


$6 + \underline{\quad} = 16$

$7 + \underline{\quad} = 16$

$8 + \underline{\quad} = 16$

$9 + \underline{\quad} = 16$

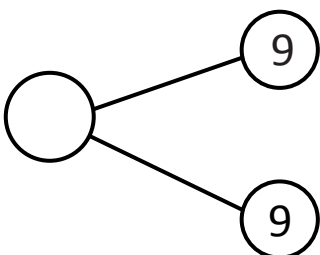


$6 + \underline{\quad} = 17$

$7 + \underline{\quad} = 17$

$8 + \underline{\quad} = 17$

$9 + \underline{\quad} = 17$



$6 + \underline{\quad} = 18$

$7 + \underline{\quad} = 18$

$8 + \underline{\quad} = 18$

$9 + \underline{\quad} = 18$