

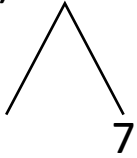


NAME _____ DATE _____

ADDITION OF TWO DIGIT NUMBERS

Solve using number bonds. Write the two number sentences that show that you added the ten first. Draw quick tens and ones.

a) $17 + 18 = \underline{\quad}$

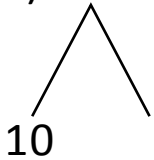


+

$18 + 10 = \underline{\quad}$

$\underline{\quad} + 7 = \underline{\quad}$

b) $11 + 23 = \underline{\quad}$

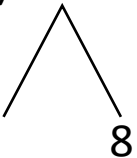


+

$23 + 10 = \underline{\quad}$

$\underline{\quad} + 1 = \underline{\quad}$

c) $18 + 19 = \underline{\quad}$

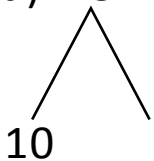


+

$19 + 10 = \underline{\quad}$

$\underline{\quad} + 8 = \underline{\quad}$

d) $15 + 24 = \underline{\quad}$



+

$24 + 10 = \underline{\quad}$

$\underline{\quad} + 5 = \underline{\quad}$