



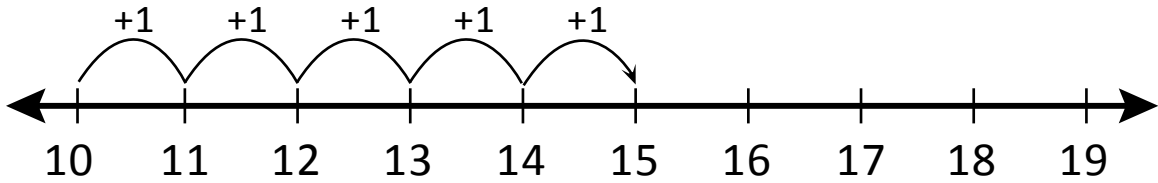
NAME \_\_\_\_\_

DATE \_\_\_\_\_

# ADDITIONS

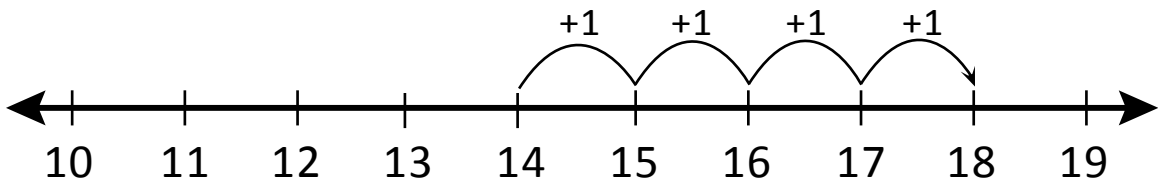
Which addition sentence does this model show?

1)



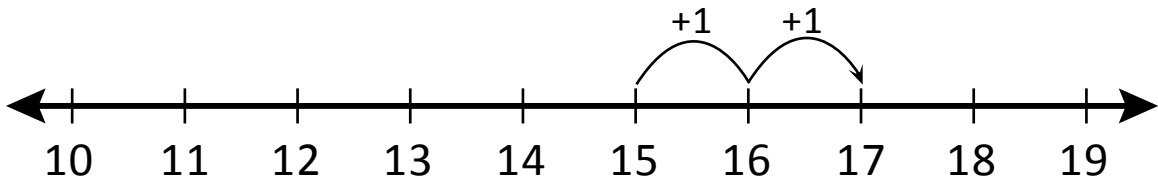
$$\underline{\quad} + \underline{\quad} = \underline{\quad}$$

2)



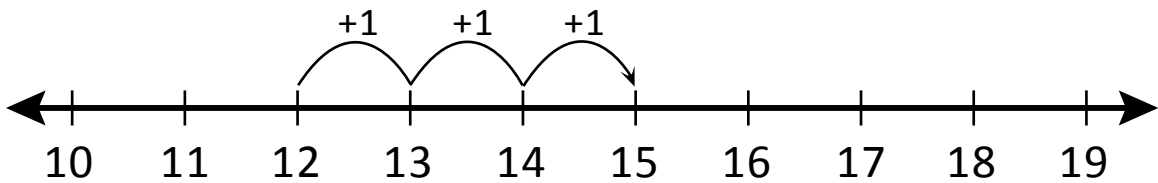
$$\underline{\quad} + \underline{\quad} = \underline{\quad}$$

3)



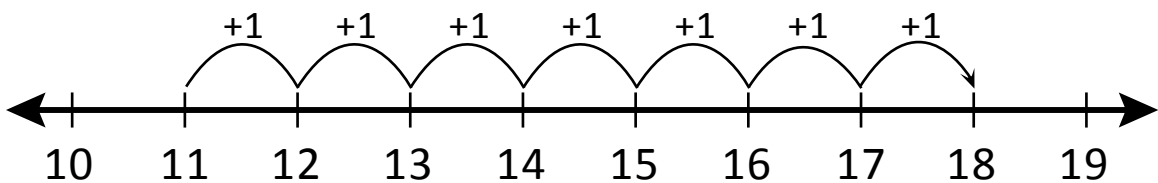
$$\underline{\quad} + \underline{\quad} = \underline{\quad}$$

4)



$$\underline{\quad} + \underline{\quad} = \underline{\quad}$$

5)



$$\underline{\quad} + \underline{\quad} = \underline{\quad}$$