



NAME \_\_\_\_\_

DATE \_\_\_\_\_

## ADDING ONE MORE

Draw one more in the group. Write the numbers to describe the new picture in the box.

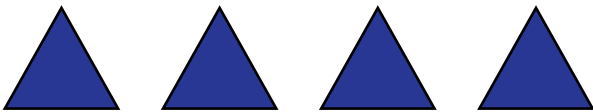
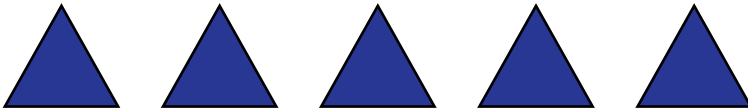
Example:



1 more than 7 is 8.

$$7 + 1 = \underline{8}$$



1)



1 more than 9 is \_\_\_\_.

$$9 + 1 = \underline{\quad}$$



2)



1 more than 6 is \_\_\_\_.

$$6 + 1 = \underline{\quad}$$

3)



1 more than 8 is \_\_\_\_.

$$8 + 1 = \underline{\quad}$$