

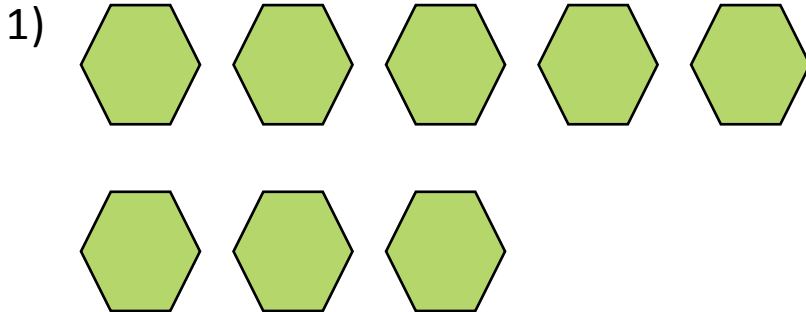


NAME \_\_\_\_\_

DATE \_\_\_\_\_

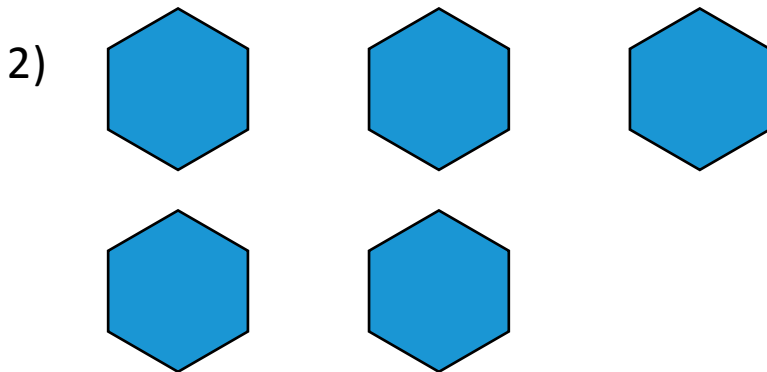
## ADDING ONE MORE

Draw one more in the group. Write the numbers to describe the new picture in the box.




1 more than 8 is \_\_\_\_.

$$8 + 1 = \underline{\quad}$$




1 more than 5 is \_\_\_\_.

$$5 + 1 = \underline{\quad}$$



1 more than 7 is \_\_\_\_.

$$7 + 1 = \underline{\quad}$$



1 more than 9 is \_\_\_\_.

$$9 + 1 = \underline{\quad}$$