



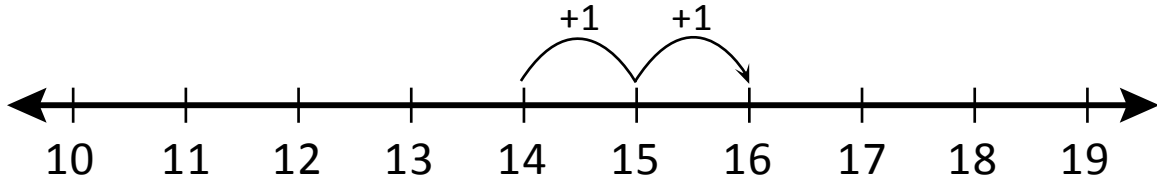
NAME _____

DATE _____

ADDITIONS

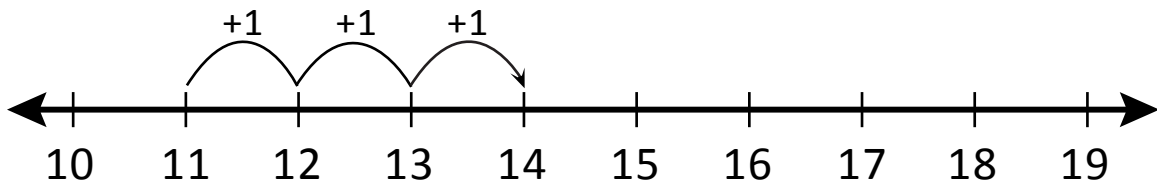
Which addition sentence does this model show?

Example:



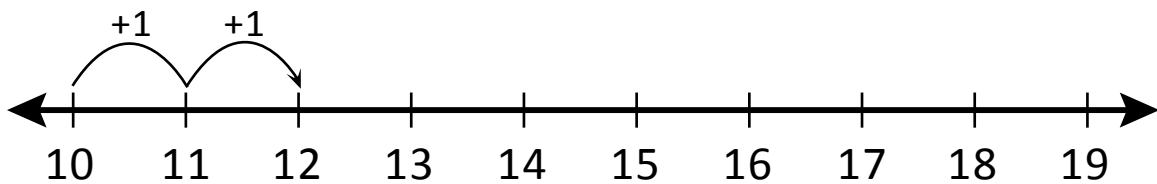
$$\underline{14} + \underline{2} = \underline{16}$$

1)



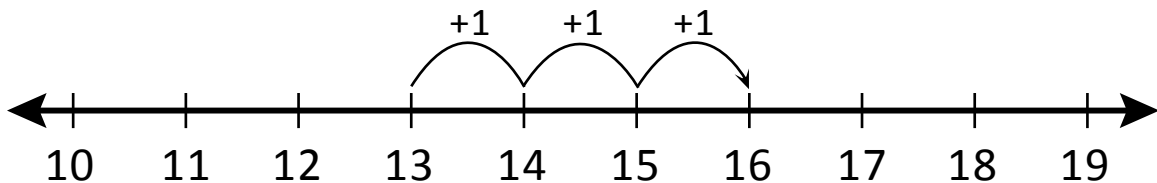
$$\underline{\quad} + \underline{\quad} = \underline{\quad}$$

2)



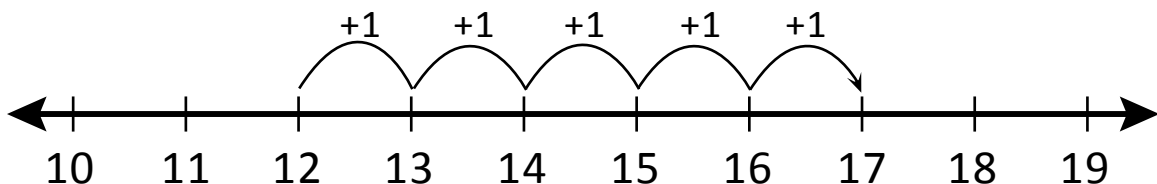
$$\underline{\quad} + \underline{\quad} = \underline{\quad}$$

3)



$$\underline{\quad} + \underline{\quad} = \underline{\quad}$$

4)



$$\underline{\quad} + \underline{\quad} = \underline{\quad}$$