



NAME _____

DATE _____

ADDITIONS

Circle the student work that correctly solves the addition problem and make new work for incorrect work.

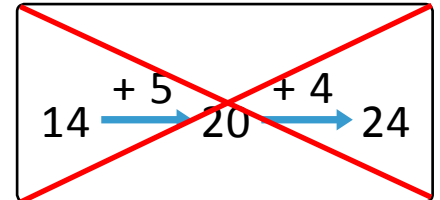
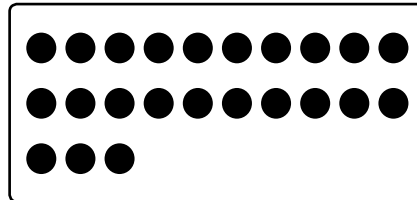
Example:

$14 + 9$

$$14 + 9 = 23$$

6	3
---	---

$$14 + 6 = 20$$

$$20 + 3 = 23$$



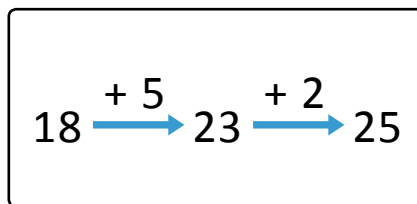
$$14 \xrightarrow{+6} 20 \xrightarrow{+3} 23$$

1) $18 + 7$

$$18 + 7 = 25$$

2	5
---	---

$$18 + 2 = 20$$

$$20 + 5 = 25$$


$$18 \xrightarrow{+2} 20 \xrightarrow{+5} 25$$