



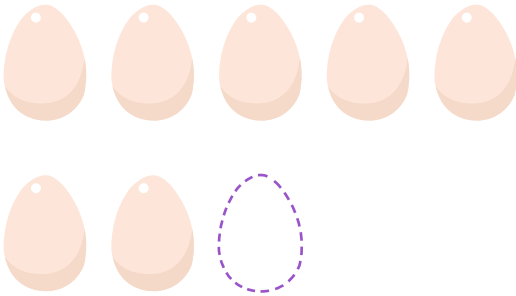
NAME _____

DATE _____

ADDING ONE MORE

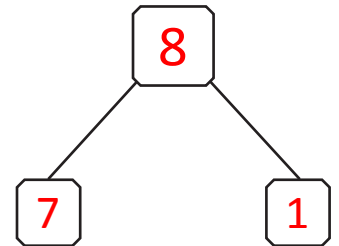
Imagine adding 1 more object to the group. Then write the numbers to match how many objects there will be.

Example:




1 more than 7 is 8.

$$\underline{7} + 1 = \underline{8}$$

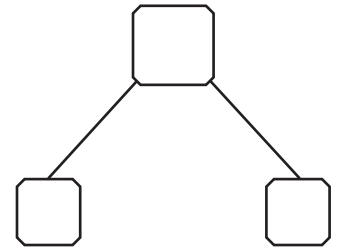


1)




1 more than 6 is ____.

$$\underline{\quad} + 1 = \underline{\quad}$$

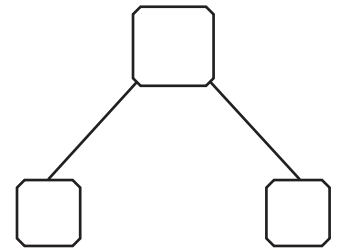


2)




1 more than 9 is ____.

$$\underline{\quad} + 1 = \underline{\quad}$$



3)



1 more than 8 is ____.

$$\underline{\quad} + 1 = \underline{\quad}$$

