




NAME \_\_\_\_\_

DATE \_\_\_\_\_

## ADDING ONE MORE

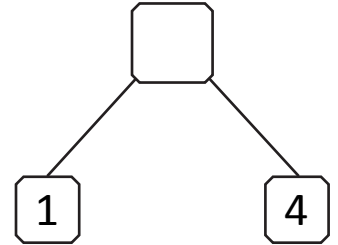
Imagine adding 1 more object to the group. Then write the numbers to match how many objects there will be.

1)




1 more than 4 is \_\_.

$$\_ + 1 = \_$$

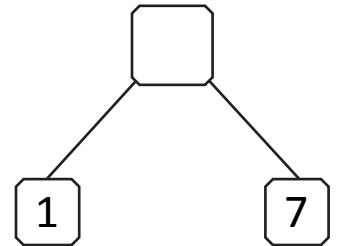


2)




1 more than 7 is \_\_.

$$\_ + 1 = \_$$

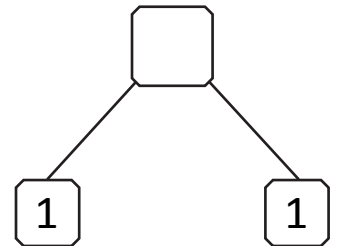


3)



1 more than 1 is \_\_.

$$\_ + 1 = \_$$



4)



1 more than 8 is \_\_.

$$\_ + 1 = \_$$

