



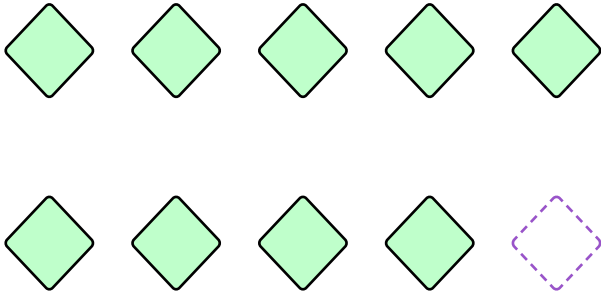
NAME \_\_\_\_\_

DATE \_\_\_\_\_

## ADDING ONE MORE


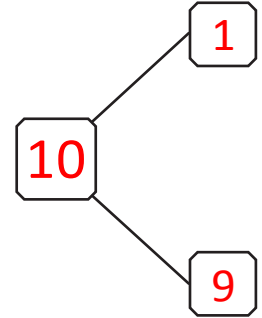
How many objects do you see? Draw one more. How many objects are there now?

Example:




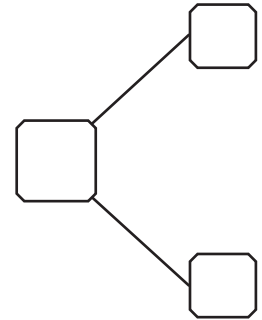
10 is 1 more than 9.

$$\underline{10} = 9 + 1$$




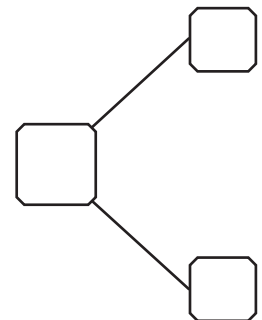
\_\_ is 1 more than 5.

$$\underline{\quad} = 5 + 1$$



\_\_ is 1 more than 7.

$$\underline{\quad} = 7 + 1$$



\_\_ is 1 more than 8.

$$\underline{\quad} = 8 + 1$$

