



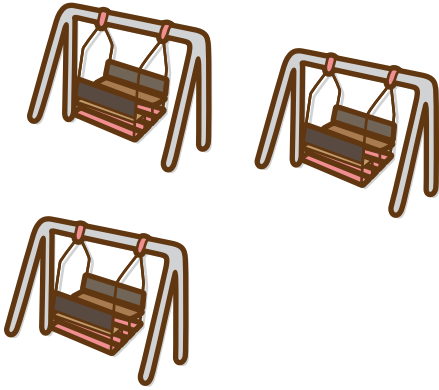
NAME _____

DATE _____

ADDING ONE MORE

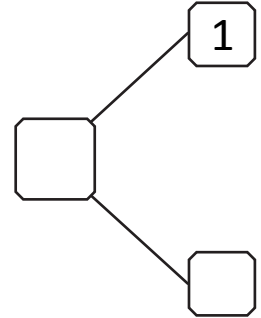
How many objects do you see? Draw one more. How many objects are there now?

1)



___ is 1 more than 3.

___ = + 1

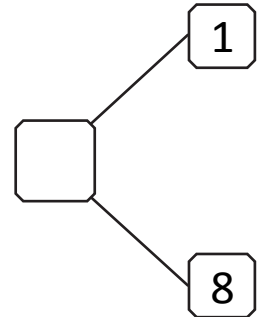


2)

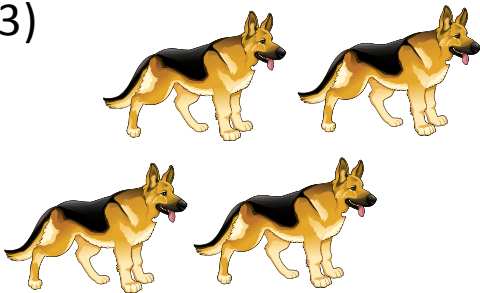


___ is 1 more than 8.

___ = + 1

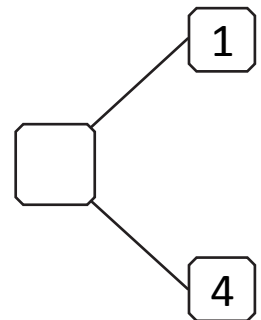


3)




___ is 1 more than 4.

___ = + 1



4)



___ is 1 more than 9.

___ = 9 + 1

