



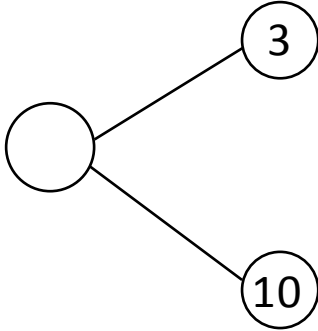
NAME \_\_\_\_\_

DATE \_\_\_\_\_

## ADDITIONS

Solve the following number bonds. Complete the mathematical sentences to make them equal to the given number bond.

a)



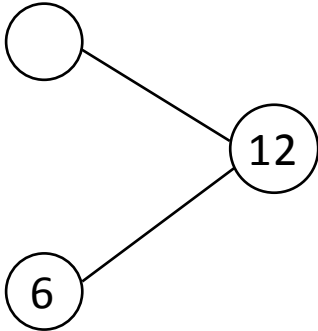
$3 + \underline{\quad} = 13$

$4 + \underline{\quad} = 13$

$5 + \underline{\quad} = 13$

$6 + \underline{\quad} = 13$

b)



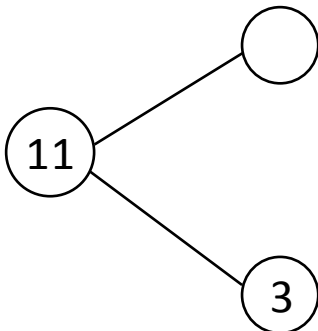
$6 + \underline{\quad} = 12$

$7 + \underline{\quad} = 12$

$8 + \underline{\quad} = 12$

$9 + \underline{\quad} = 12$

c)



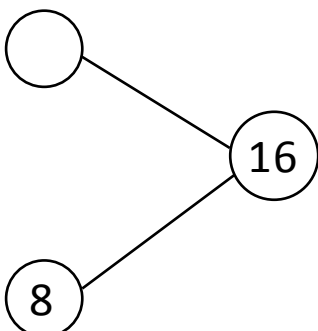
$3 + \underline{\quad} = 11$

$4 + \underline{\quad} = 11$

$5 + \underline{\quad} = 11$

$6 + \underline{\quad} = 11$

d)



$8 + \underline{\quad} = 16$

$7 + \underline{\quad} = 16$

$6 + \underline{\quad} = 16$

$5 + \underline{\quad} = 16$