




NAME \_\_\_\_\_

DATE \_\_\_\_\_

# WAYS TO MAKE 6!


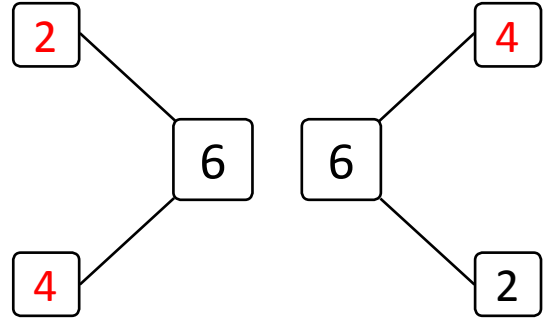
Use the picture to help you write all of the different ways to make 6.

Example:




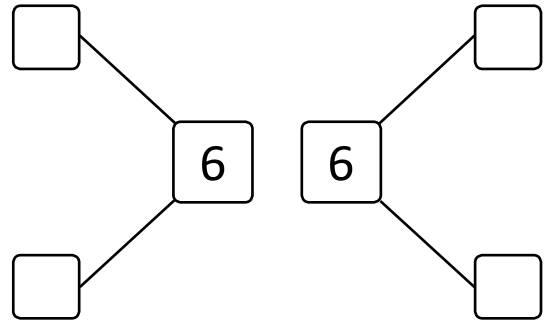
$$\boxed{2} + \boxed{4}$$

$$\boxed{4} + \boxed{2}$$




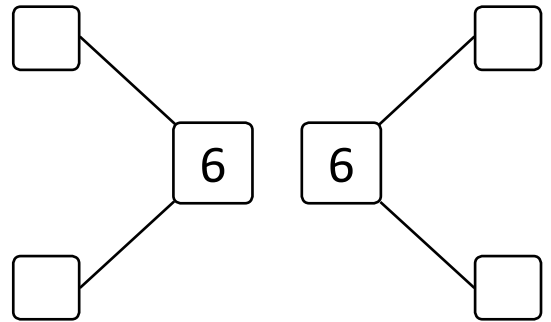
$$\boxed{1} + \boxed{\phantom{0}}$$

$$\boxed{5} + \boxed{\phantom{0}}$$



$$\boxed{\phantom{0}} + \boxed{3}$$

$$\boxed{3} + \boxed{\phantom{0}}$$



$$\boxed{6} + \boxed{\phantom{0}}$$

$$\boxed{0} + \boxed{\phantom{0}}$$

