



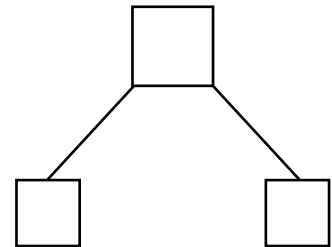
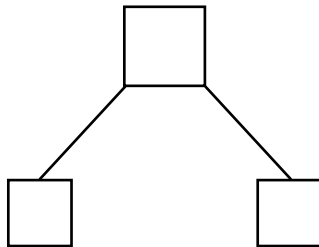
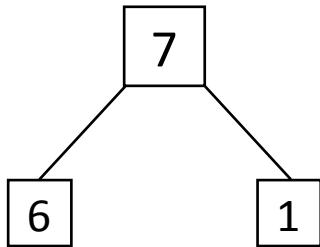
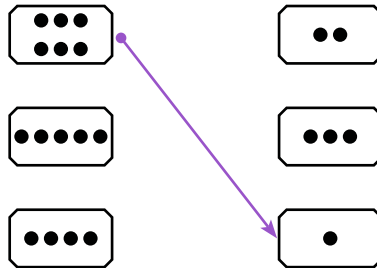
NAME _____

DATE _____

WAYS TO MAKE 7!

Showing number bonds according to matching the numbers.

- 1) Match the dots to show different ways to make 7. Then draw a number bond for each pair.

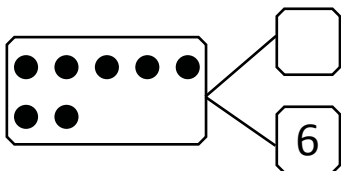


- 2) Show 2 ways to make 7. Use the number bonds above for help.

$$\boxed{5} + \boxed{} = \boxed{}$$

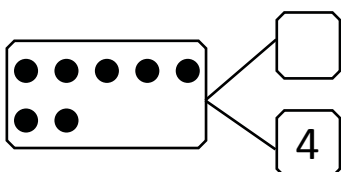
$$\boxed{} + \boxed{3} = \boxed{}$$

- 3) Fill in the missing number in the number bond. Write 2 addition sentences for the number bond you made. Notice where the equal sign is, to make your sentences true.



$$\boxed{6} + \boxed{} = \boxed{7}$$

$$\boxed{7} = \boxed{1} + \boxed{}$$



$$\boxed{3} + \boxed{} = \boxed{7}$$

$$\boxed{7} = \boxed{4} + \boxed{}$$