



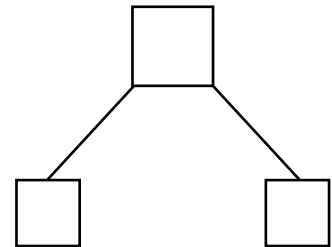
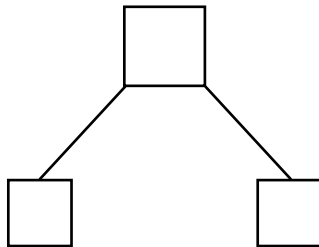
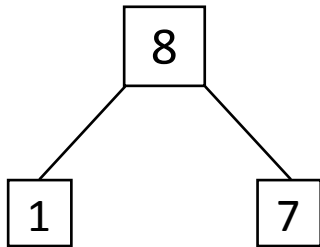

NAME _____

DATE _____

WAYS TO MAKE 8!

Showing number bonds according to matching the numbers.

1) Match the dots to show different ways to make 8. Then draw a number bond for each pair.

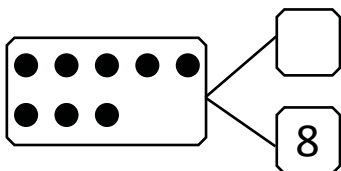


2) Show 2 ways to make 8. Use the number bonds above for help.

$$\boxed{3} + \boxed{} = \boxed{}$$

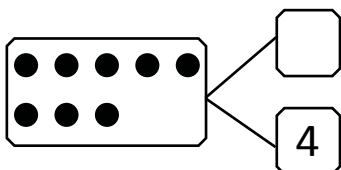
$$\boxed{} + \boxed{2} = \boxed{}$$

3) Fill in the missing number in the number bond. Write 2 addition sentences for the number bond you made. Notice where the equal sign is, to make your sentences true.



$$\boxed{} + \boxed{8} = \boxed{8}$$

$$\boxed{8} = \boxed{} + \boxed{0}$$



$$\boxed{4} + \boxed{} = \boxed{8}$$

$$\boxed{8} = \boxed{4} + \boxed{}$$