



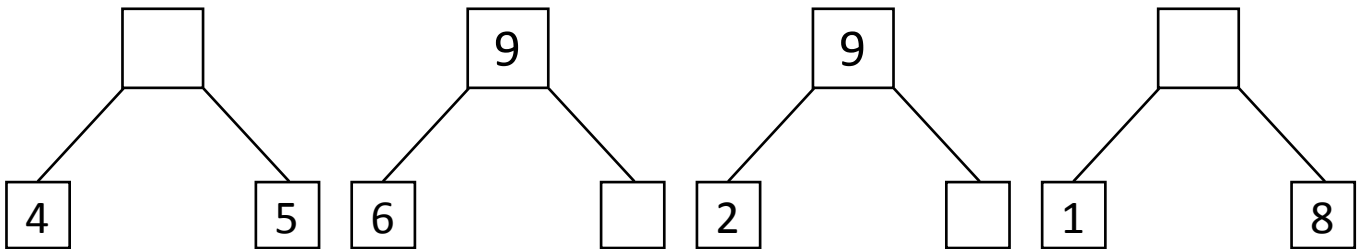
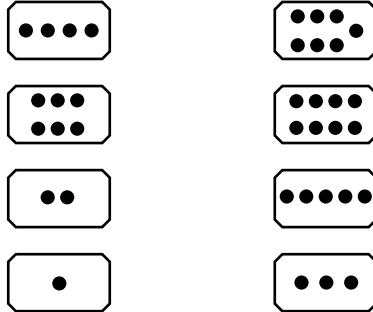
NAME _____

DATE _____

WAYS TO MAKE 9!

Showing number bonds according to matching the numbers.

1) Match the dots to show different ways to make 9. Then draw a number bond for each pair.

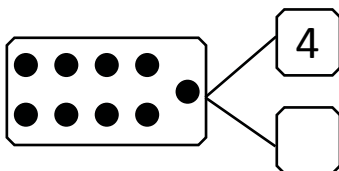


2) Show 2 ways to make 9. Use the number bonds above for help.

$$\boxed{2} + \boxed{} = \boxed{}$$

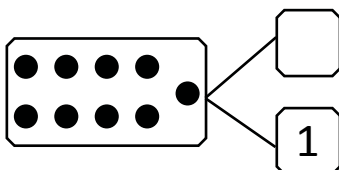
$$\boxed{} + \boxed{8} = \boxed{}$$

3) Fill in the missing number in the number bond. Write 2 addition sentences for the number bond you made. Notice where the equal sign is, to make your sentences true.



$$\boxed{4} + \boxed{5} = \boxed{}$$

$$\boxed{9} = \boxed{5} + \boxed{}$$



$$\boxed{8} + \boxed{} = \boxed{9}$$

$$\boxed{} + \boxed{8} = \boxed{9}$$