



NAME _____

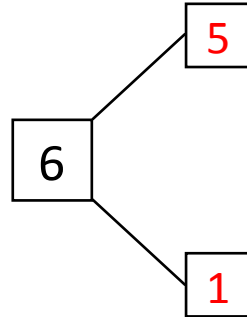
DATE _____

WAYS TO MAKE 6!

Complete the number bond and number sentence.

Example:

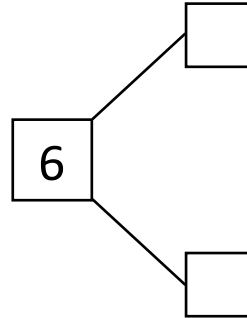

Circle 5. How many more does 5 need to make 6?



$$5 + 1 = 6$$

$$1 + 5 = 6$$

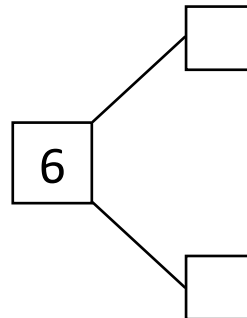

1) Circle 4. How many more does 4 need to make 6?



$$4 + \square = 6$$

$$\square + \square = 6$$

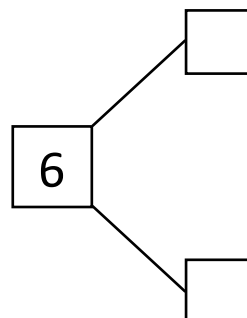
2) Circle 1. How many more does 1 need to make 6?



$$\square + 5 = 6$$

$$5 + \square = \square$$

3) Circle 2. How many more does 2 need to make 6?



$$\square + \square = 6$$

$$4 + 2 = \square$$