



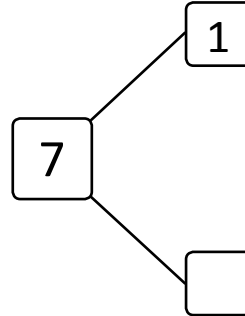

NAME _____

DATE _____

WAYS TO MAKE 7!

Complete the number bond and number sentence.

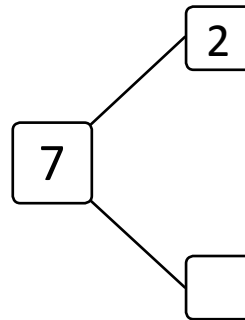
1) Circle 1. How many more does 1 need to make 7?



$$1 + \square = 7$$

$$7 = \square + 1$$

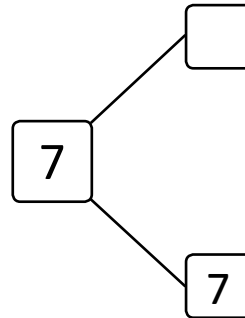
2) Circle 2. How many more does 2 need to make 7?



$$2 + \square = 7$$

$$7 = \square + 2$$

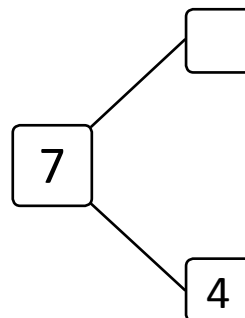
3) Circle 7. How many more does 7 need to make 7?



$$7 + \square = 7$$

$$7 = \square + 7$$

4) Circle 4. How many more does 4 need to make 7?



$$4 + \square = 7$$

$$7 = \square + 3$$