



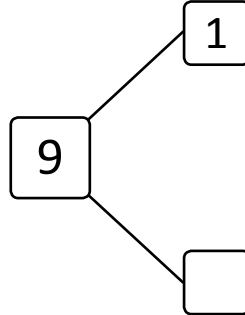

NAME _____

DATE _____

WAYS TO MAKE 9!

Complete the number bond and number sentence.

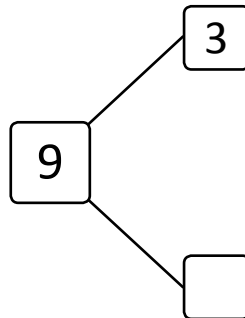

1) Circle 1. How many more does 1 need to make 9?



$$\boxed{1} + \boxed{} = \boxed{9}$$

$$\boxed{9} + \boxed{} = \boxed{1}$$

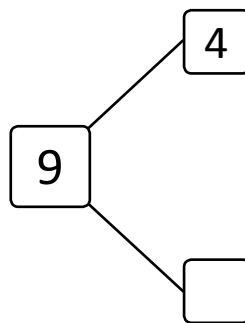

2) Circle 3. How many more does 3 need to make 9?



$$\boxed{3} + \boxed{} = \boxed{9}$$

$$\boxed{9} = \boxed{} + \boxed{3}$$

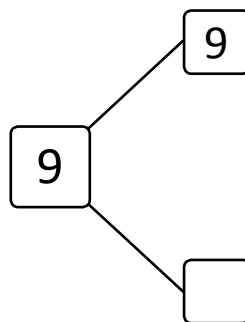

3) Circle 4. How many more does 4 need to make 9?



$$\boxed{4} + \boxed{} = \boxed{9}$$

$$\boxed{9} = \boxed{} + \boxed{4}$$

4) Circle 9. How many more does 7 need to make 9?



$$\boxed{9} + \boxed{} = \boxed{9}$$

$$\boxed{9} = \boxed{} + \boxed{9}$$