



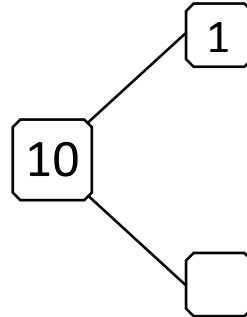

NAME _____

DATE _____

WAYS TO MAKE 10!

Complete the number bond and number sentence.

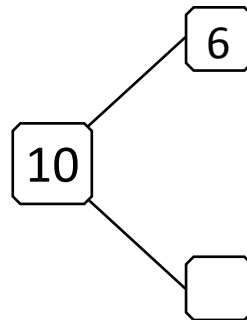

1) Circle 1. How many more does 1 need to make 10?



$$\boxed{1} + \square = \boxed{10}$$

$$\boxed{10} = \square + \boxed{1}$$

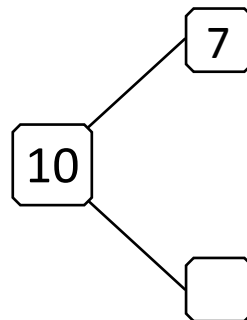

2) Circle 6. How many more does 6 need to make 10?



$$\boxed{6} + \square = \boxed{10}$$

$$\boxed{10} = \square + \boxed{6}$$

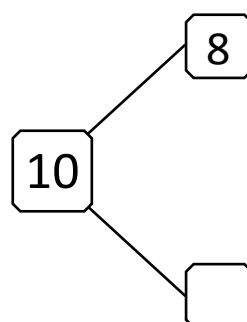
3) Circle 7. How many more does 7 need to make 10?



$$\boxed{7} + \square = \boxed{10}$$

$$\boxed{10} = \square + \boxed{7}$$

4) Circle 8. How many more does 8 need to make 10?



$$\boxed{8} + \square = \boxed{10}$$

$$\boxed{10} = \square + \boxed{8}$$