



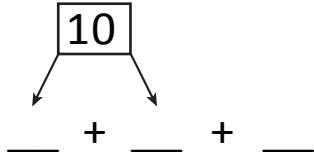
NAME _____

DATE _____

ADDING THREE NUMBERS

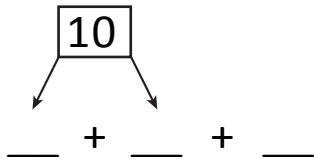
Circle the numbers that make ten. Use number bonds and complete number sentences.

1) $2 + 7 + 8$



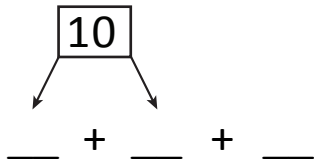
$10 + \underline{\quad} = \underline{\quad}$

2) $2 + 6 + 4$



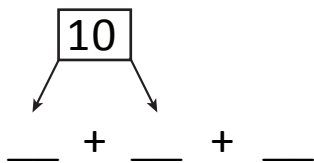
$10 + \underline{\quad} = \underline{\quad}$

3) $2 + 4 + 8$



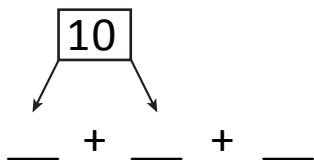
$10 + \underline{\quad} = \underline{\quad}$

4) $5 + 5 + 3$



$10 + \underline{\quad} = \underline{\quad}$

5) $2 + 5 + 8$



$10 + \underline{\quad} = \underline{\quad}$