



NAME _____

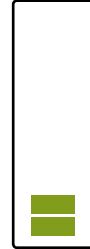

DATE _____

NUMBER BOND

Find the missing number in the number sentences.


1)

$$\square + \square = \square$$



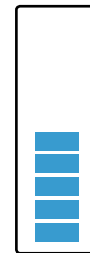
2)

$$\square + \square = \square$$




3)

$$\square + \square = \square$$



4)

$$\square + \square = \square$$



5)

$$\square + \square = \square$$

