



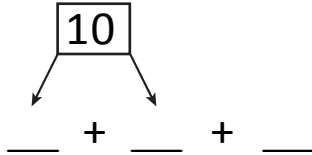
NAME _____

DATE _____

ADDING THREE NUMBERS

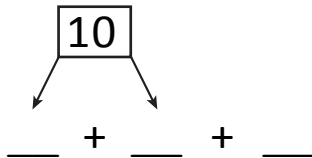
Circle the numbers that make ten. Use number bonds and complete number sentences.

1) $9 + 7 + 3$



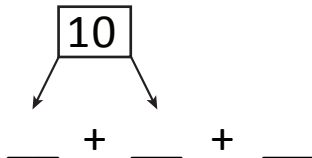
$$\boxed{10} + _ = _$$

2) $7 + 1 + 3$



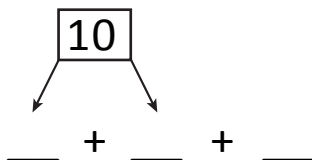
$$\boxed{10} + _ = _$$

3) $4 + 6 + 5$



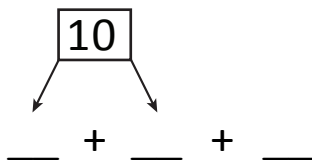
$$\boxed{10} + _ = _$$

4) $4 + 9 + 1$



$$\boxed{10} + _ = _$$

5) $7 + 2 + 3$



$$\boxed{10} + _ = _$$