



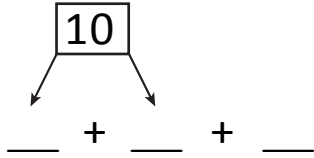
NAME _____

DATE _____

ADDING THREE NUMBERS

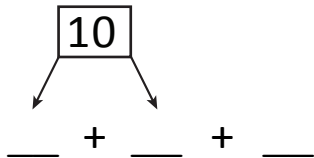
Circle the numbers that make ten. Use number bonds and complete number sentences.

1) $3 + 3 + 7$



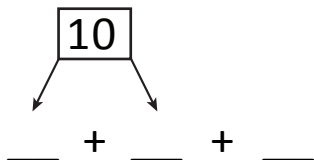
$10 + \underline{\quad} = \underline{\quad}$

2) $4 + 6 + 7$



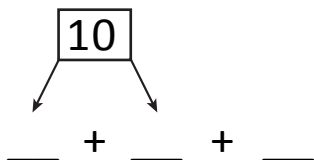
$10 + \underline{\quad} = \underline{\quad}$

3) $3 + 7 + 6$



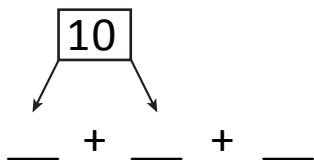
$10 + \underline{\quad} = \underline{\quad}$

4) $8 + 2 + 2$



$10 + \underline{\quad} = \underline{\quad}$

5) $6 + 1 + 4$



$10 + \underline{\quad} = \underline{\quad}$