



NAME _____

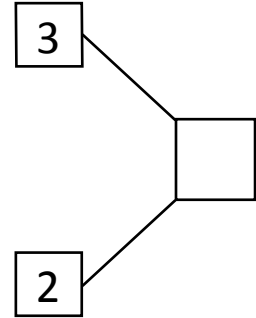
DATE _____

NUMBER BOND

Use the number sentences to draw a picture using dots (●) and fill in the number bond to tell a math story.

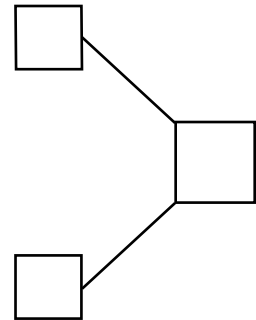
1)

$$\boxed{3} + \boxed{2}$$



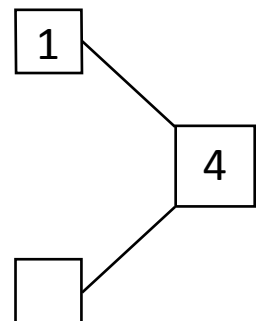
2)

$$\boxed{2} + \boxed{}$$



3)

$$\boxed{1} + \boxed{}$$



4)

$$\boxed{7} + \boxed{}$$

