



NAME \_\_\_\_\_

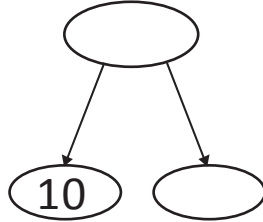
DATE \_\_\_\_\_

## ADDING THREE NUMBERS

Select the numbers that make ten. Put them into a number bond and solve.  
Write the new number bond.

1)  $10$

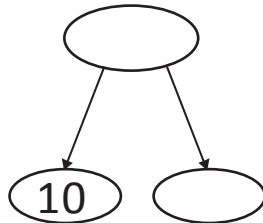
$3 + 7 + 7 = \underline{\quad}$



$10 + \underline{\quad} = \underline{\quad}$

2)  $10$

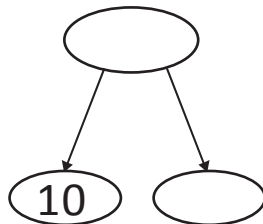
$2 + 8 + 5 = \underline{\quad}$



$10 + \underline{\quad} = \underline{\quad}$

3)  $10$

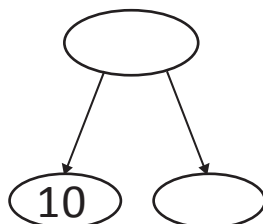
$4 + 9 + 1 = \underline{\quad}$



$10 + \underline{\quad} = \underline{\quad}$

4)  $10$

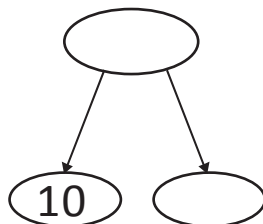
$5 + 5 + 3 = \underline{\quad}$



$10 + \underline{\quad} = \underline{\quad}$

5)  $10$

$2 + 6 + 4 = \underline{\quad}$



$10 + \underline{\quad} = \underline{\quad}$