



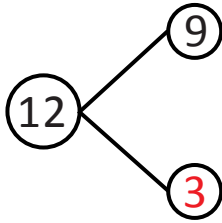
NAME \_\_\_\_\_

DATE \_\_\_\_\_

## ADDITION NUMBER SENTENCES

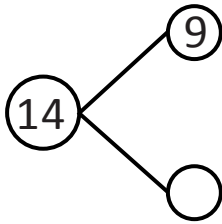
Solve the number bond and write the number sentence with answer you got as shown in the example.

Example:

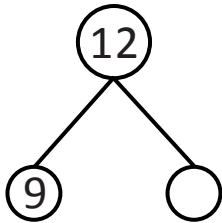


$$2 + 1 = 3$$

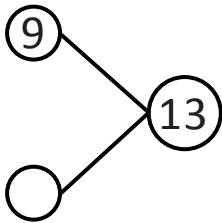
1)



2)



3)



4)

