



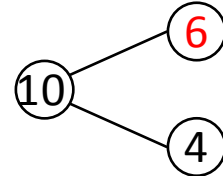
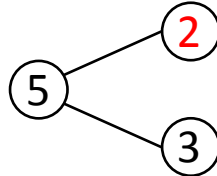
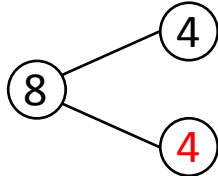
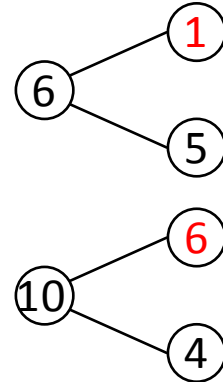
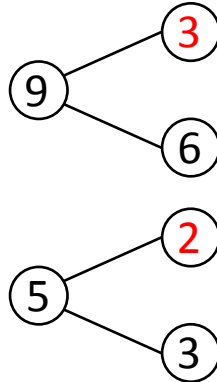
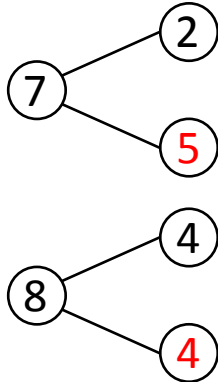
NAME _____

DATE _____

ADDITIONS (USING NUMBER BONDS)

Complete the number bonds.

Example:



Fill in the missing numbers that make the number sentences true.

$5 + 2 = \underline{7}$

$5 + \underline{2} = 7$

$3 + 6 = \underline{9}$

$\underline{3} + 6 = 9$

$5 + 1 = \underline{6}$

$5 + \underline{1} = 6$

$4 + 4 = \underline{8}$

$\underline{4} + 4 = 8$

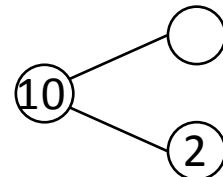
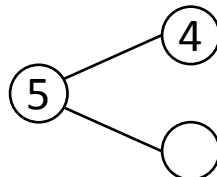
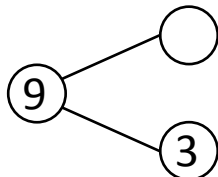
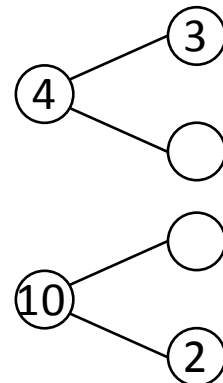
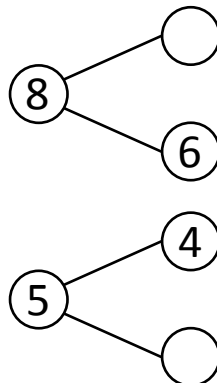
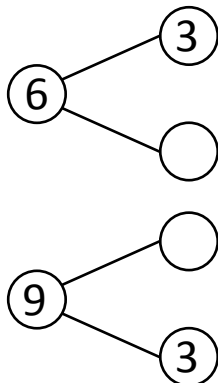
$3 + 2 = \underline{5}$

$3 + \underline{2} = 5$

$6 + 4 = \underline{10}$

$\underline{6} + 4 = 10$

1)



Fill in the missing numbers that make the number sentences true.

$3 + 3 = \underline{\quad}$

$\underline{\quad} + 6 = 8$

$2 + 6 = \underline{\quad}$

$4 + \underline{\quad} = 5$

$3 + 1 = \underline{\quad}$

$\underline{\quad} + 2 = 10$

$6 + 3 = \underline{\quad}$

$3 + \underline{\quad} = 6$

$4 + 1 = \underline{\quad}$

$\underline{\quad} + 3 = 9$

$8 + 2 = \underline{\quad}$

$3 + \underline{\quad} = 4$