



NAME _____

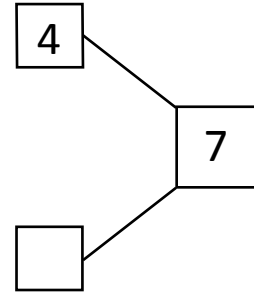
DATE _____

NUMBER BOND

Fill in the number bond for given number sentences.

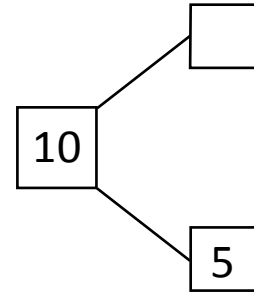
1)

$$\square + 3 = 7$$



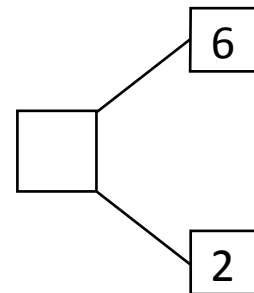
2)

$$5 + \square = 10$$



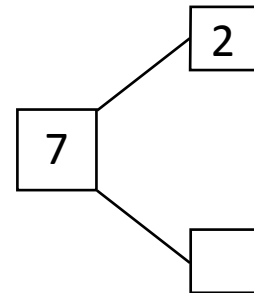
3)

$$6 + \square = 8$$



4)

$$\square + 2 = 7$$



5)

$$\square + 1 = 9$$

