



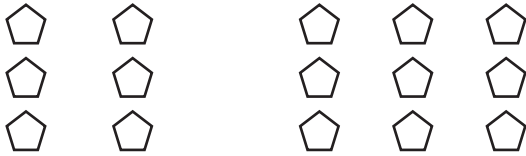
NAME \_\_\_\_\_

DATE \_\_\_\_\_

# ADDITIONS


Change the picture to make a ten. Write the easier number sentence and solve.

1.  $6 + 9$



$$10 + \underline{\quad} = \underline{\quad}$$

4.  $7 + 7$



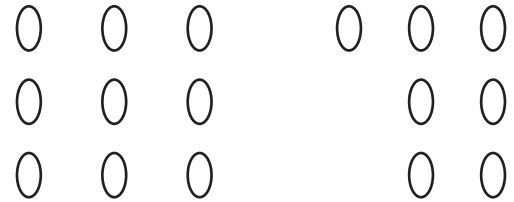
$$10 + \underline{\quad} = \underline{\quad}$$

2.  $4 + 9$




$$10 + \underline{\quad} = \underline{\quad}$$

5.  $9 + 7$



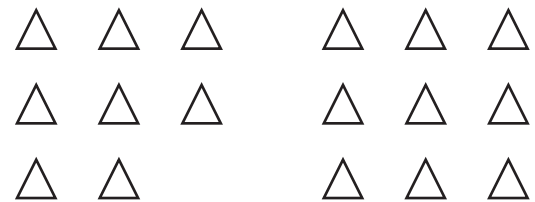
$$10 + \underline{\quad} = \underline{\quad}$$

3.  $9 + 2$



$$10 + \underline{\quad} = \underline{\quad}$$

6.  $8 + 9$



$$10 + \underline{\quad} = \underline{\quad}$$