



NAME \_\_\_\_\_

DATE \_\_\_\_\_

# ADDITIONS

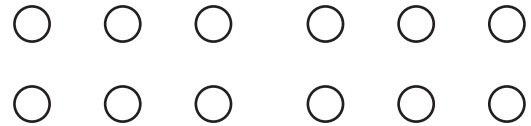
Change the picture to make a ten. Write the easier number sentence and solve.

1.  $7 + 6$



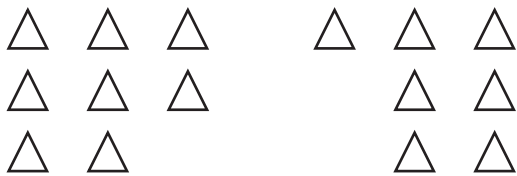
$$10 + \underline{\quad} = \underline{\quad}$$

4.  $6 + 6$



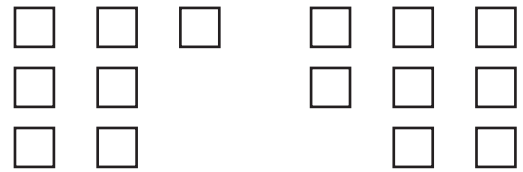
$$10 + \underline{\quad} = \underline{\quad}$$

2.  $8 + 7$



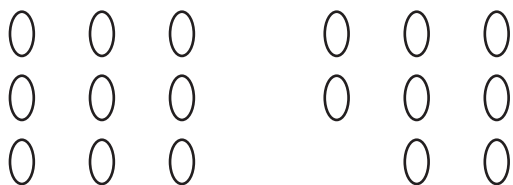
$$10 + \underline{\quad} = \underline{\quad}$$

5.  $7 + 8$



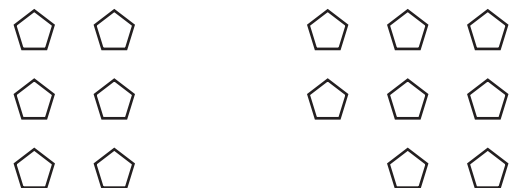
$$10 + \underline{\quad} = \underline{\quad}$$

3.  $9 + 8$



$$10 + \underline{\quad} = \underline{\quad}$$

6.  $6 + 8$



$$10 + \underline{\quad} = \underline{\quad}$$