



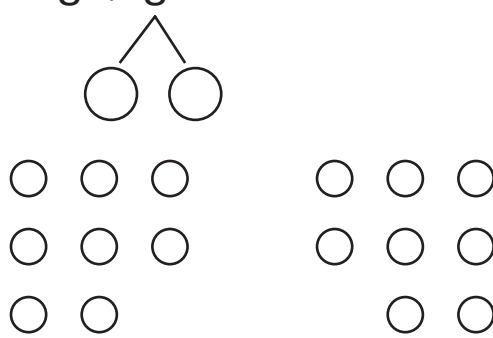
NAME _____

DATE _____

ADDITIONS

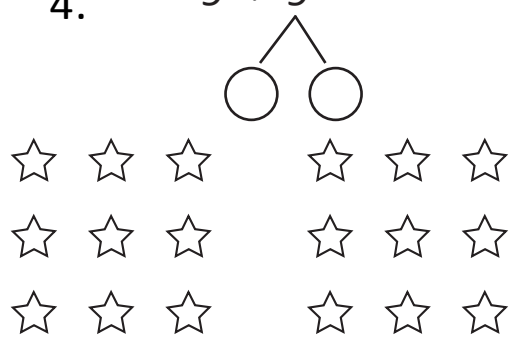
Change the picture to make a ten. Write the easier number sentence and solve.

1. $8 + 8$



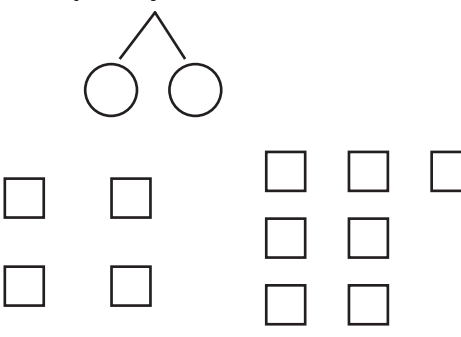
$10 + \underline{\quad} = \underline{\quad}$

4. $9 + 9$



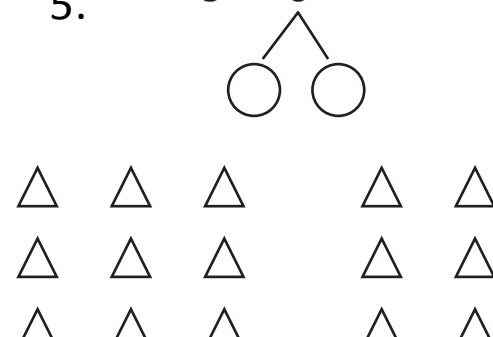
$10 + \underline{\quad} = \underline{\quad}$

2. $4 + 7$



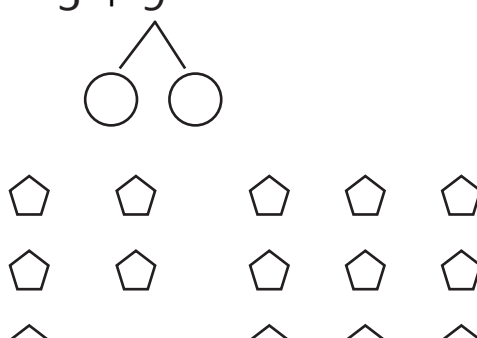
$10 + \underline{\quad} = \underline{\quad}$

5. $9 + 6$



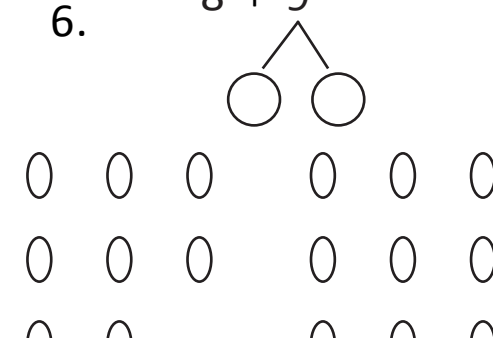
$10 + \underline{\quad} = \underline{\quad}$

3. $5 + 9$



$10 + \underline{\quad} = \underline{\quad}$

6. $8 + 9$



$10 + \underline{\quad} = \underline{\quad}$