




NAME \_\_\_\_\_

DATE \_\_\_\_\_

## ADDITIONS

Make ten to solve. Use the number bond to show how to take 10 out.

1.  $6 + 9 = \underline{\quad}$




$10 + \underline{\quad} = \underline{\quad}$

2.  $9 + 8 = \underline{\quad}$



$10 + \underline{\quad} = \underline{\quad}$

3.  $3 + 9 = \underline{\quad}$




$10 + \underline{\quad} = \underline{\quad}$

4.  $9 + 7 = \underline{\quad}$



$10 + \underline{\quad} = \underline{\quad}$

5.  $4 + 9 = \underline{\quad}$




$10 + \underline{\quad} = \underline{\quad}$

6.  $9 + 2 = \underline{\quad}$



$10 + \underline{\quad} = \underline{\quad}$

7.  $8 + 9 = \underline{\quad}$



$10 + \underline{\quad} = \underline{\quad}$