



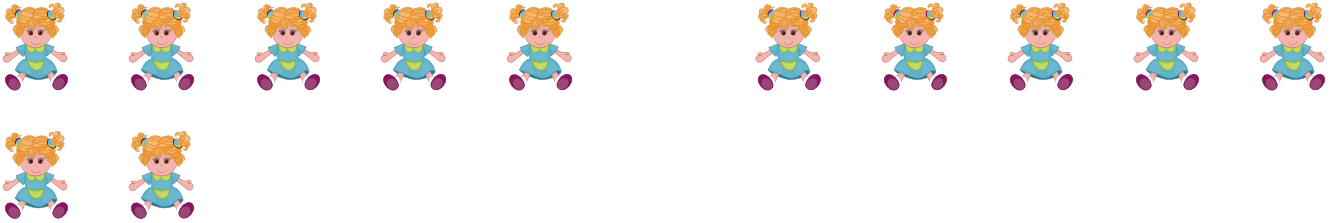
NAME _____

DATE _____

ADDITIONS


Solve by arranging 5 objects in each group and do addition of the following problems.

- 1) Dora has 12 dolls. She gave 5 dolls to her sister. How many dolls are left with Dora?




Dora is left with ___ dolls.

- 2) Jack brought 15 fruits. He ate 10 fruits. How many fruits are left?



Jack is left with ___ fruits.

- 3) Mary made 12 muffins. Her friends ate 10 muffins. How many muffins are left with Mary?



Mary is left with ___ muffins.

- 4) Emma has 15 comic books. She completed reading 11 books. How many comic books are left?



___ comic books are left.