



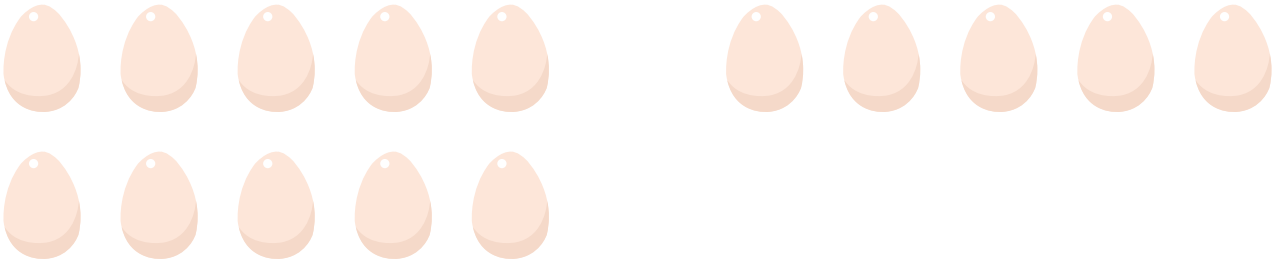
NAME _____

DATE _____

ADDITIONS


Solve by arranging 5 objects in each group and do addition of the following problems.

1) David bought 15 eggs. 6 eggs are broken. How many eggs are left?




___ eggs are left.

2) Angela has 13 oranges. She made orange juice with 9 oranges. How many oranges are left?



___ oranges are left.

3) Anthony has 15 lollipops. He ate 13 lollipops. How many lollipops are left?



Anthony is left with ___ lollipops.

4) Larry counted 12 sparrows in the garden. After some time 7 sparrows went away. How many sparrows are left?



___ sparrows are left.