



NAME _____

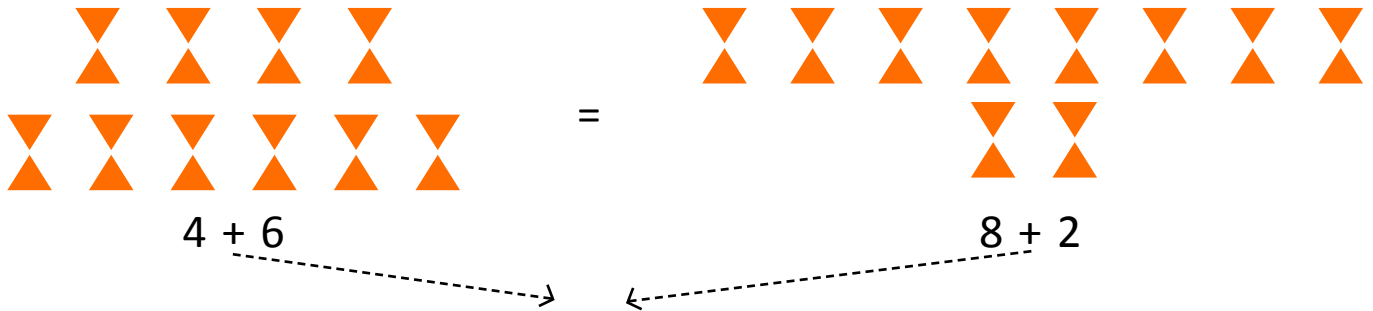
DATE _____

ADDITION WORD PROBLEMS

Giving proofs to the reasoning questions.

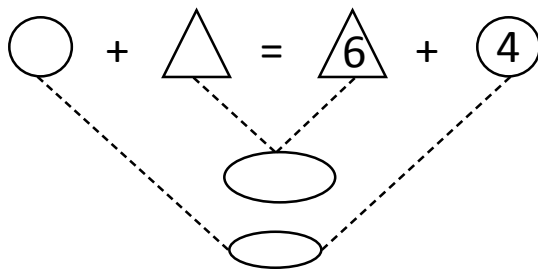
1) Chetan says when the unknown is 8, It makes the number sentence true $4 + 6 = \underline{\quad} + 2$. Robert says he is wrong. He says 10 makes the number sentence true?

a) Who is correct ? Explain your thinking using pictures, words or numbers.

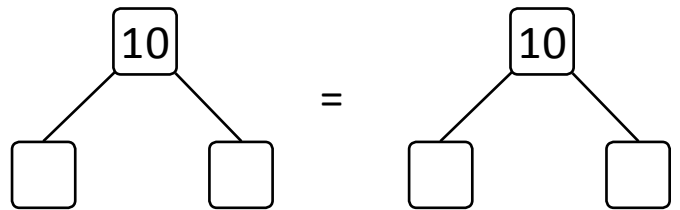


Chetan is right because they are equal.

b) Chetan says that 4 and 6 is equal to 6 and 4. Robert says he is wrong again. Explain who is correct, using pictures, numbers or words.

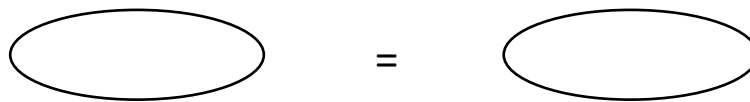


$$\underline{\quad} + \underline{\quad} = \underline{\quad} + \underline{\quad}$$



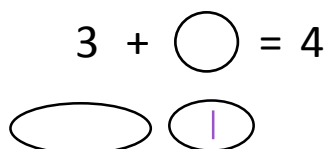
Therefore Chetan is correct.

c) Next Chetan tells Robert $4=4$. Robert says he is wrong again. Explain who is correct, using pictures, numbers or words.



Chetan is correct. Its true!

d) Robert decided to share 4 carrot sticks with her friend Chetan. Robert put 3 carrot sticks in his plate and some more on the table. How many carrot sticks did Robert put on the table.



1 carrot stick.