



NAME \_\_\_\_\_

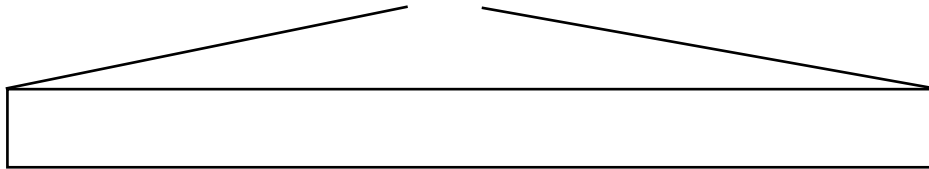
DATE \_\_\_\_\_

## ADDITION WORD PROBLEMS

Read the word problem. Draw a tape diagram and label.

Write a number sentence and a statement that matches the story.

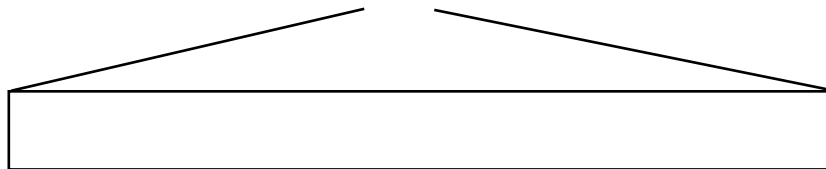
- 1) Nickel have 13 marbles in his bag and 6 in his pocket. How many marbles does Nickel have?



$$10 + 9 = 13 + 6 = \underline{\quad}$$

Nickle have      marbles.

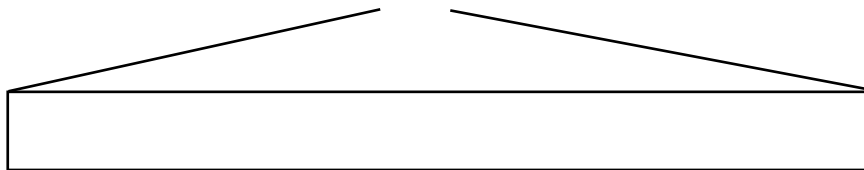
- 2) Bhagya have 9 bangles to the right hand and 8 bangles to the left hand. How many bangles does she have in all



$$10 + 7 = 9 + 8 = \underline{\quad}$$

Bhagya have      bangles in all.

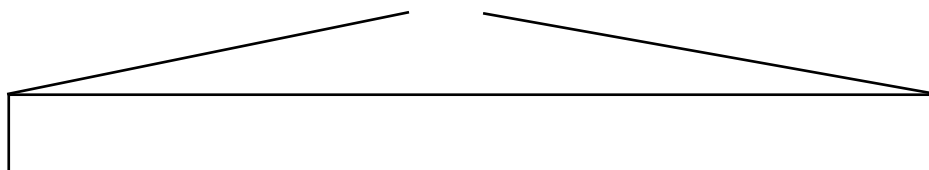
- 3) Naseem read a book 14 pages in the morning and 4 pages in the evening and completed it. How many total pages in that book



$$10 + 8 = 18 \text{ (OR) } 14 + 4 = \underline{\quad}$$

Total pages in the book     .

- 4) Shyam expended 16 dollars for his friends birthday gift and 3 dollars for his self expenditure. How much amount he spent totally?



$$10 + 9 = 16 + 3 = \underline{\quad}$$

Shyam spent total amount     .