



NAME _____

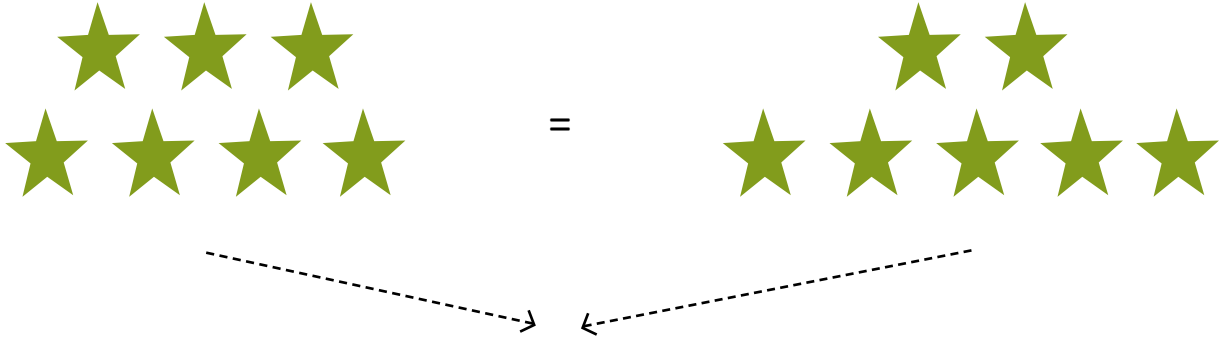
DATE _____

ADDITION WORD PROBLEMS

Giving proofs to the reasoning questions.

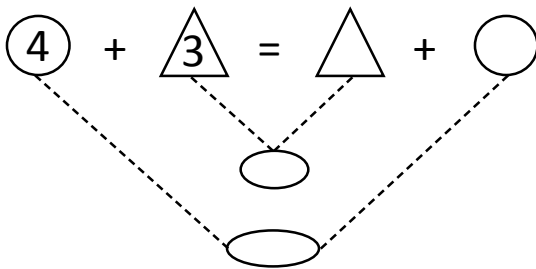
1) Mary says when the unknown is 2, It makes the number sentence true $3 + 4 = \underline{\quad} + 5$. Sheela says she is wrong. She says 7 makes the number sentence true?

a) Who is correct ? Explain your thinking using pictures, words or numbers.

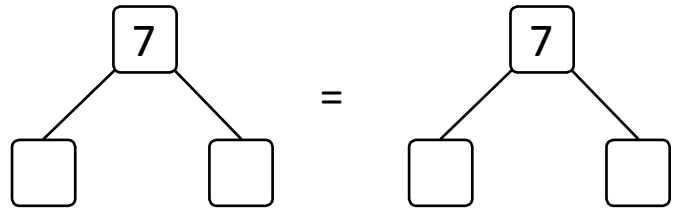


Mary is right because they are equal.

b) Mary says that 3 and 4 is equal to 4 and 3. Sheela says she is wrong again. Explain who is correct, using pictures, numbers or words.

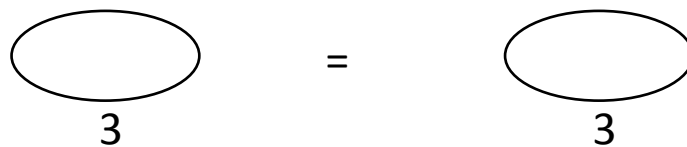


$$\underline{\quad} + \underline{\quad} = \underline{\quad} + \underline{\quad}$$



Mary is correct.

c) Next Mary tells Sheela $3 = 3$. Sheela says she is wrong again. Explain who is correct, using pictures, numbers or words.



Mary is correct. Its true!

d) Sheela decided to share 5 carrot sticks with her friend Mary. Sheela put 2 carrot sticks in her plate, and some more on the table. How many carrot sticks did Sheela put on the table?

$$2 + \bigcirc = 5$$

3 carrot sticks.

