



NAME _____

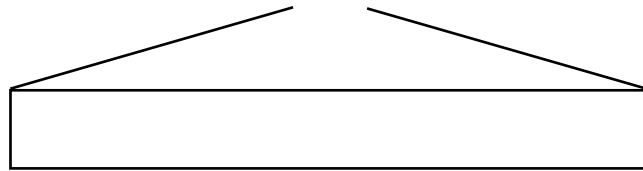
DATE _____

ADDITION WORD PROBLEMS

Read the word problem. Draw a tape diagram and label.

Write a number sentence and a statement that matches the story.

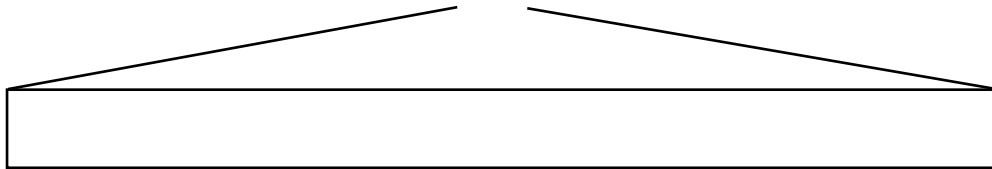
- 1) There are two packets of pens. The first packet contains 9 pens and in the second packet there are 4 pens. How many pens in two packets?



$$10 + _ = 13 \text{ (OR) } 9 + _ = 13$$

Total pens in two packets are $_$ only.

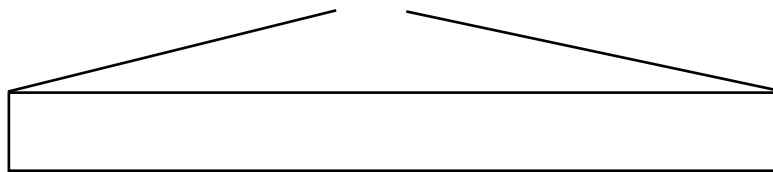
- 2) There are 12 pins in a box and 9 pins in another box. How many pins are there totally in two boxes?



$$10 + 10 + 1 = 12 + 9 = _$$

Number of pins in two boxes $_$.

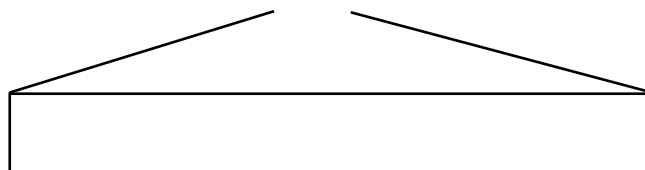
- 3) There are 9 mango trees and 7 lemon trees in a garden. How many total trees in a garden?



$$10 + 6 = 9 + 7 = _$$

Total trees in a garden $_$.

- 4) David gave 7 dollars to his son. The next day he gave again 6 dollars. How much money does david gave to his son?



$$_ + _ = _ + _ = 13$$

David gave $_$ dollars to his son.