



NAME _____

DATE _____

ADDITION SENTENCES

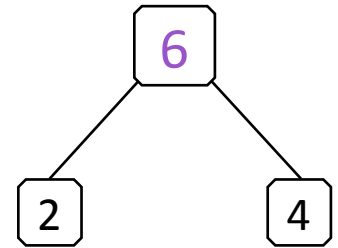
Questions based on thinking and understanding.

Example:

Matt and Lucy are playing with 6 cars. If Matt is playing with 2 of them, how many is Lucy playing with?



$$\boxed{2} + \boxed{4} = \boxed{6}$$



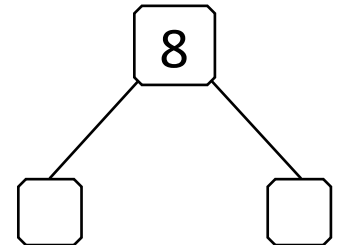
$$\boxed{6} - \boxed{2} = \boxed{4}$$

Lucy is playing with 4 cars.

1) James ate 8 chocolates at the end of the day. He ate 4 chocolates before he ate lunch. How many chocolates did he eat after lunch?



$$\boxed{4} + \boxed{} = \boxed{8}$$



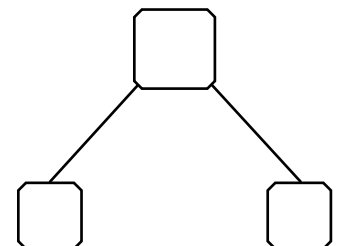
$$\boxed{8} - \boxed{} = \boxed{}$$

James ate chocolates after lunch.

2) Mom bought 8 books. The next day she returned some of them. Now she has 3 books. How many books did mom return?



$$\boxed{3} + \boxed{} = \boxed{8}$$



$$\boxed{8} - \boxed{} = \boxed{}$$

Mom returned books.