



NAME _____

DATE _____

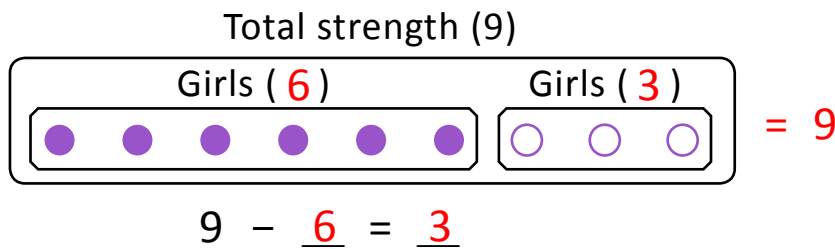
ADDITION WORD PROBLEMS

Questions based on thinking and understanding.

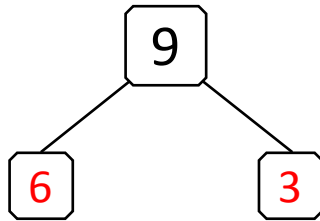
Example:

There were 6 girls in the class room. Some more came after the bell rang. Then there were 9 girls.

a) Draw a picture to help you solve the problem.



b) Draw a complete number bond that goes with this story.

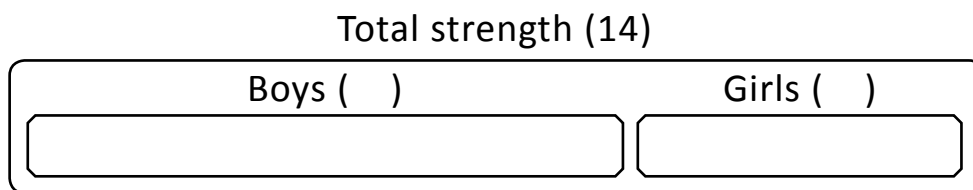


c) Write an addition sentence to match the story.

$$\underline{6} + \underline{3} = 9$$

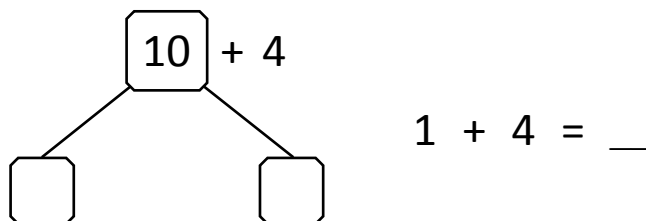
1) There were 9 boys and some girls in the class room. The total strength of the class is 14

a) Draw a picture to help you solve the problem.



$$14 - \underline{\quad} = \underline{\quad}$$

b) Draw a complete number bond that goes with this story.



c) Write an addition sentence to match the story.

$$\underline{\quad} + \underline{\quad} = 14$$