




NAME \_\_\_\_\_ DATE \_\_\_\_\_

## COUNTING OBJECTS BY TENS AND ONES


Count the objects and fill in the number bond and place value chart. Complete the number sentences by adding the tens and ones.

1)



$4 \times 10 = 40$


Tens	Ones



$6 \times 1 = 6$

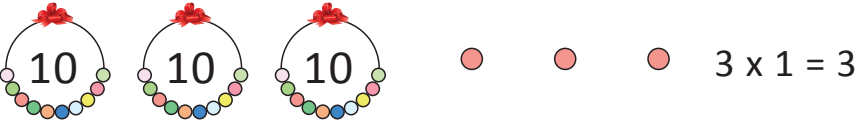
\_\_\_\_ + \_\_\_\_ = \_\_\_\_.  
 \_\_\_\_ tens + \_\_\_\_ ones = \_\_\_\_ .


2)



$9 \times 10 = 90$


Tens	Ones



$3 \times 1 = 3$


\_\_\_\_ + \_\_\_\_ = \_\_\_\_.  
 \_\_\_\_ tens + \_\_\_\_ ones = \_\_\_\_ .


3)



$7 \times 10 = 70$

Tens	Ones



$5 \times 1 = 5$

\_\_\_\_ + \_\_\_\_ = \_\_\_\_.  
 \_\_\_\_ tens + \_\_\_\_ ones = \_\_\_\_ .
