



NAME _____

DATE _____

COUNTING OBJECTS BY TENS AND ONES

Count the objects and fill in the number bond and place value chart. Complete the number sentences by adding the tens and ones.

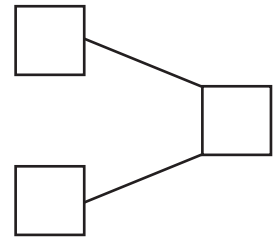
1)  $5 \times 10 = 50$

 $7 \times 1 = 7$


___ + ___ = ___.

___ tens + ___ ones = ___.

Tens	Ones



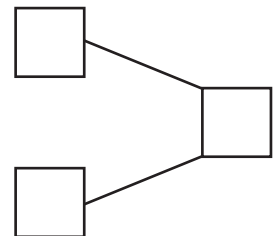
2)  $9 \times 10 = 90$


 $5 \times 1 = 5$


___ + ___ = ___.

___ tens + ___ ones = ___.

Tens	Ones



3)  $8 \times 10 = 80$

 $2 \times 1 = 2$

___ + ___ = ___.

___ tens + ___ ones = ___.

Tens	Ones

