




NAME _____

DATE _____


KNOW ABOUT EVEN AND ODD

Count the number of pictures and write **EVEN** or **ODD**.


1) Are the number of fishes even or odd?




2) Are the number of snails even or odd?



3) Are the number of parrots even or odd?



4) Are the number of cars even or odd?



5) Are the number of cupcakes even or odd?



6) Are the number of juices even or odd?