



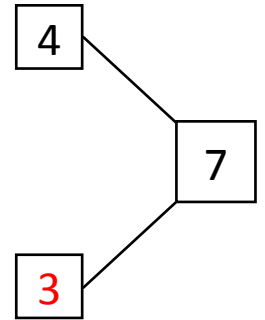
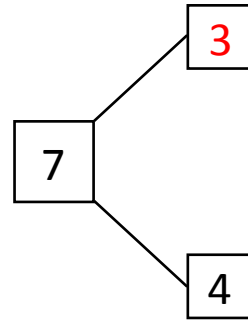
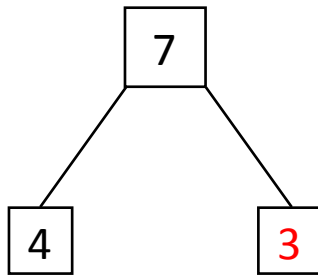
NAME \_\_\_\_\_

DATE \_\_\_\_\_

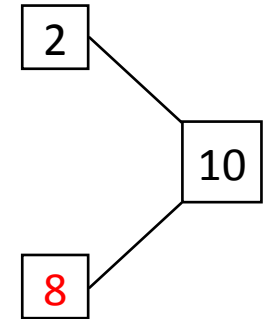
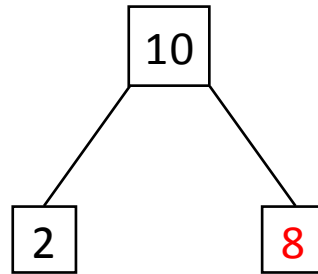
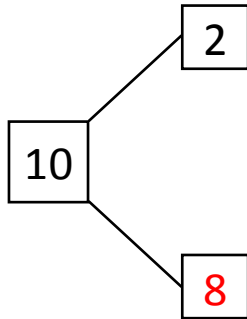
## SUBTRACTIONS

Complete the number bond and number sentences.

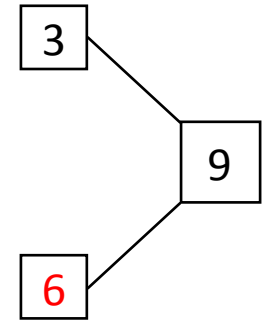
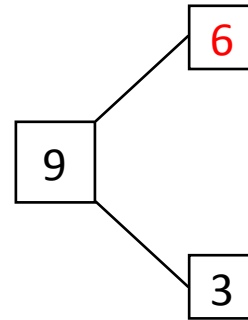
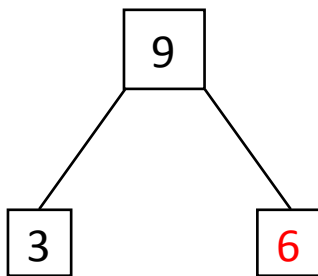
a)  $7 - 4 = \underline{3}$



b)  $10 - 2 = \underline{8}$



c)  $9 - 3 = \underline{6}$



d)  $7 - 5 = \underline{2}$

