



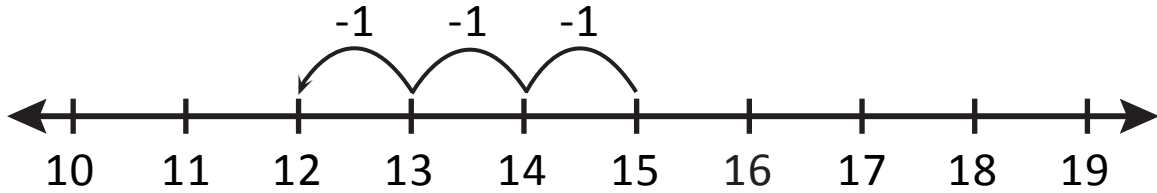
NAME \_\_\_\_\_

DATE \_\_\_\_\_

# SUBTRACTIONS

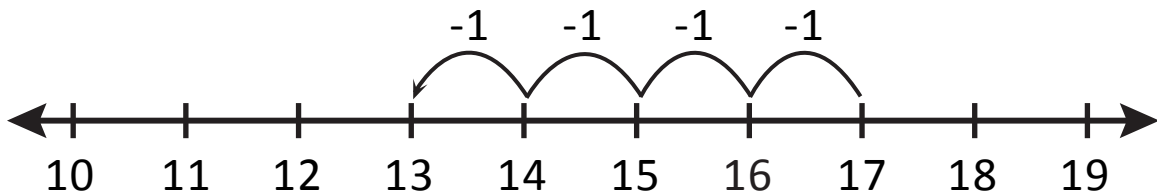
Which subtraction sentence does this model show?

Example:



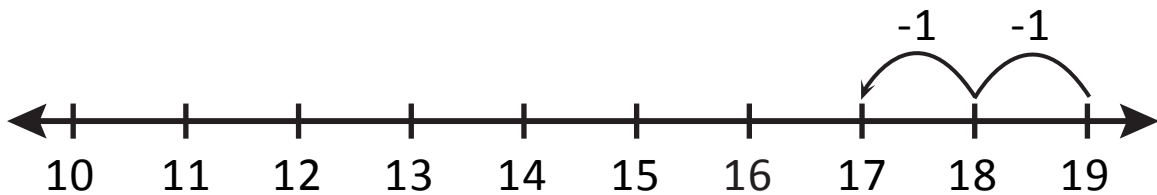
$$\underline{15} - \underline{3} = \underline{12}$$

1)



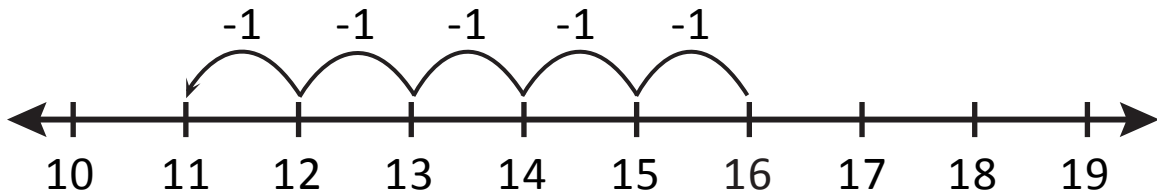
$$\underline{\quad} - \underline{\quad} = \underline{\quad}$$

2)



$$\underline{\quad} - \underline{\quad} = \underline{\quad}$$

3)



$$\underline{\quad} - \underline{\quad} = \underline{\quad}$$

4)



$$\underline{\quad} - \underline{\quad} = \underline{\quad}$$