



NAME _____

DATE _____

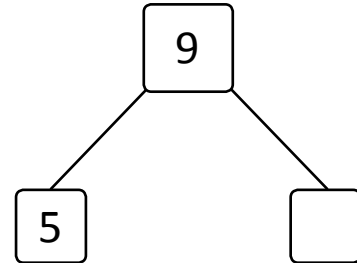
SUBTRACTIONS

Write the subtraction sentences by using number bonds or using images.

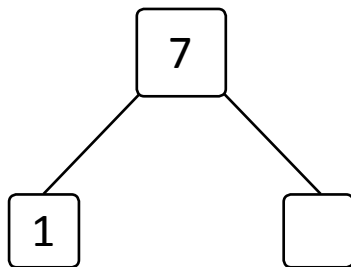
a) $10 - 6 = \underline{\quad}$



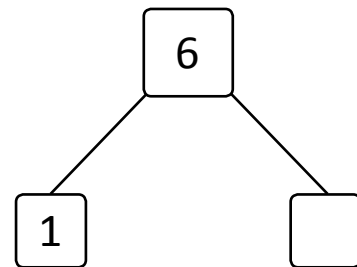
e) $9 - 5 = \underline{\quad}$



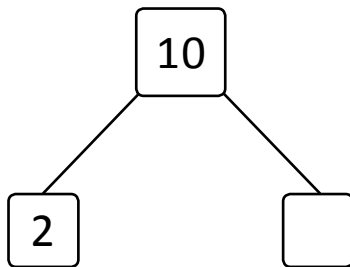
b) $7 - 1 = \underline{\quad}$



f) $6 - 1 = \underline{\quad}$



c) $10 - 2 = \underline{\quad}$



g) $6 - 2 = \underline{\quad}$



d) $10 - 9 = \underline{\quad}$



h) $9 - 5 = \underline{\quad}$

