





NAME \_\_\_\_\_

DATE \_\_\_\_\_

## SUBTRACTION WORD PROBLEMS

Solve the math stories. Complete and label the number bond and the picture number bond.

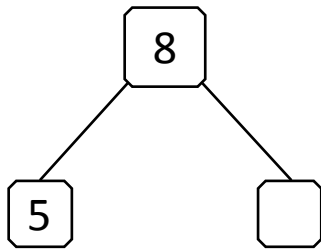
- 1) Raghu has 8 pencils. He gave 5 pencils to his friends. How many pencils are left with Raghu?



Raghu gave to his friends





Left with Raghu



$$5 + \square = 8$$

$$8 - 5 = \square$$

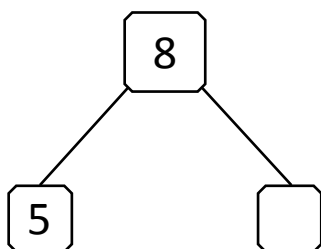
- 2) 8 pupils appeared for a test. only 5 pupils have been selected. How many pupils have not selected?



Selected pupils



Not selected pupils



$$5 + \square = 8$$

$$8 - \square = 5$$