



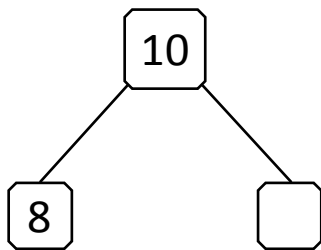
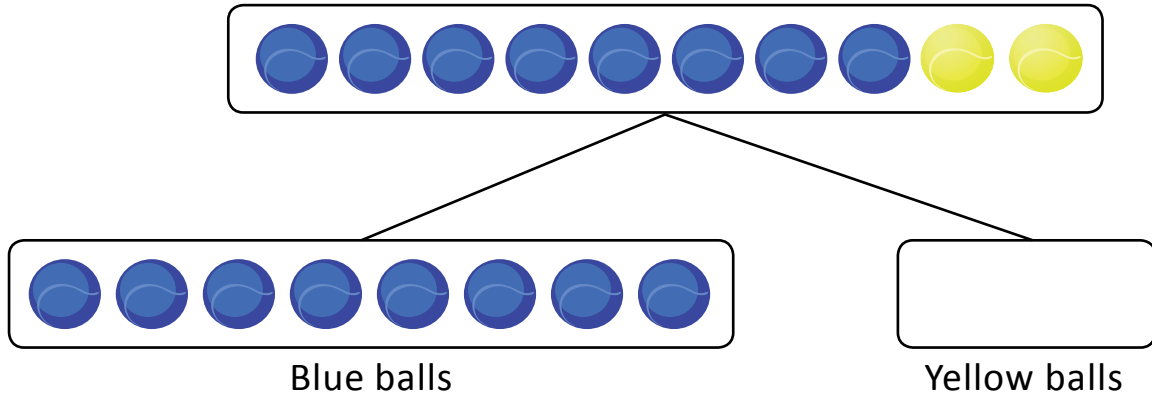
NAME _____

DATE _____

SUBTRACTION WORD PROBLEMS

Solve the math stories. Complete and label the number bond and the picture number bond.

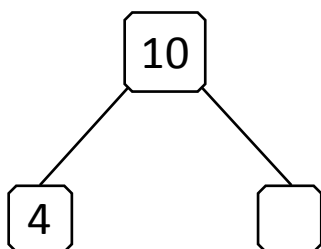
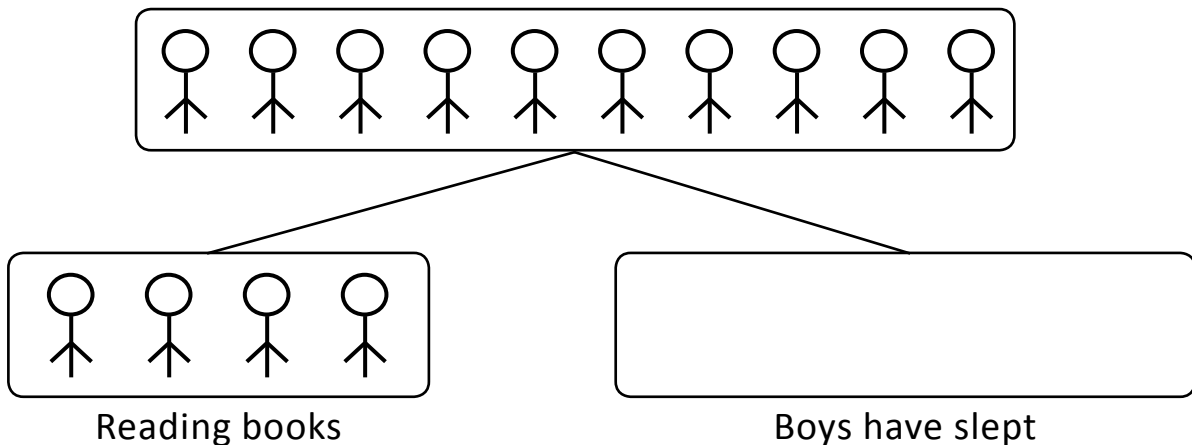
- 1) In a game kit there are 10 balls. out of ten 8 balls are blue. Remaining balls are yellow. How many yellow balls are there?



$$\boxed{8} + \boxed{} = \boxed{10}$$

$$\boxed{10} - \boxed{8} = \boxed{}$$

- 2) In a school hostel 10 boys are in a room 4 boys are reading books the remaining boys are sleeping. How many boys have slept?



$$\boxed{4} + \boxed{} = \boxed{10}$$

$$\boxed{10} - \boxed{4} = \boxed{}$$