




NAME _____

DATE _____

SUBTRACTION WORD PROBLEMS

Solve the math stories. Complete and label the number bond and the picture number bond.

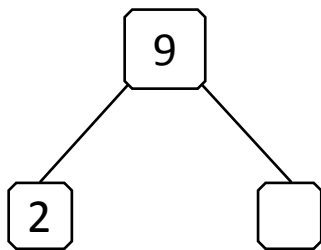
- 1) There are 9 chairs in a staff room. Wooden chairs are 2. Remaining chairs are iron. How many iron chairs are there?



Wooden chairs



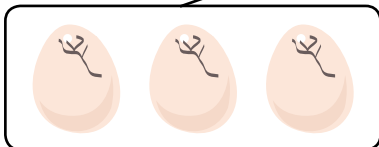
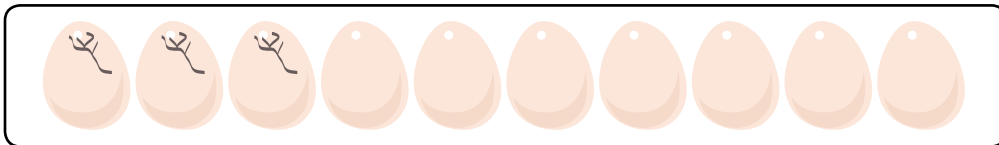
Iron chairs



$$2 + \square = 9$$

$$9 - 2 = \square$$

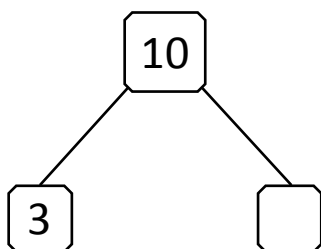
- 2) There are 10 eggs in a box. 3 eggs were already broken. How many remaining eggs have left?



Eggs broken



Eggs not broken



$$3 + \square = 10$$

$$10 - 3 = \square$$